



Mathematics: analysis and approaches
Standard level
Paper 2

16 May 2025

Zone A morning | Zone B morning | Zone C morning

Candidate session number

--	--	--	--	--	--	--	--	--	--

1 hour 30 minutes

Instructions to candidates

- Write your session number in the boxes above.
- Do not open this examination paper until instructed to do so.
- A graphic display calculator is required for this paper.
- Section A: answer all questions. Answers must be written within the answer boxes provided.
- Section B: answer all questions in the answer booklet provided. Fill in your session number on the front of the answer booklet, and attach it to this examination paper and your cover sheet using the tag provided.
- Unless otherwise stated in the question, all numerical answers should be given exactly or correct to three significant figures.
- A clean copy of the **mathematics: analysis and approaches SL formula booklet** is required for this paper.
- The maximum mark for this examination paper is **[80 marks]**.




└

11

1
 2
 3
 4
 5
 6
 7
 8
 9
 10
 11
 12
 13
 14
 15
 16
 17
 18
 19
 20
 21
 22
 23
 24
 25
 26
 27
 28
 29
 30
 31
 32
 33
 34
 35
 36
 37
 38
 39
 40
 41
 42
 43
 44
 45
 46
 47
 48
 49
 50
 51
 52
 53
 54
 55
 56
 57
 58
 59
 60
 61
 62
 63
 64
 65
 66
 67
 68
 69
 70
 71
 72
 73
 74
 75
 76
 77
 78
 79
 80
 81
 82
 83
 84
 85
 86
 87
 88
 89
 90
 91
 92
 93
 94
 95
 96
 97
 98
 99
 100
 101
 102
 103
 104
 105
 106
 107
 108
 109
 110
 111
 112
 113
 114
 115
 116
 117
 118
 119
 120
 121
 122
 123
 124
 125
 126
 127
 128
 129
 130
 131
 132
 133
 134
 135
 136
 137
 138
 139
 140
 141
 142
 143
 144
 145
 146
 147
 148
 149
 150
 151
 152
 153
 154
 155
 156
 157
 158
 159
 160
 161
 162
 163
 164
 165
 166
 167
 168
 169
 170
 171
 172
 173
 174
 175
 176
 177
 178
 179
 180
 181
 182
 183
 184
 185
 186
 187
 188
 189
 190
 191
 192
 193
 194
 195
 196
 197
 198
 199
 200
 201
 202
 203
 204
 205
 206
 207
 208
 209
 210
 211
 212
 213
 214
 215
 216
 217
 218
 219
 220
 221
 222
 223
 224
 225
 226
 227
 228
 229
 230
 231
 232
 233
 234
 235
 236
 237
 238
 239
 240
 241
 242
 243
 244
 245
 246
 247
 248
 249
 250
 251
 252
 253
 254
 255
 256
 257
 258
 259
 260
 261
 262
 263
 264
 265
 266
 267
 268
 269
 270
 271
 272
 273
 274
 275
 276
 277
 278
 279
 280
 281
 282
 283
 284
 285
 286
 287
 288
 289
 290
 291
 292
 293
 294
 295
 296
 297
 298
 299
 300
 301
 302
 303
 304
 305
 306
 307
 308
 309
 310
 311
 312
 313
 314
 315
 316
 317
 318
 319
 320
 321
 322
 323
 324
 325
 326
 327
 328
 329
 330
 331
 332
 333
 334
 335
 336
 337
 338
 339
 340
 341
 342
 343
 344
 345
 346
 347
 348
 349
 350
 351
 352
 353
 354
 355
 356
 357
 358
 359
 360
 361
 362
 363
 364
 365
 366
 367
 368
 369
 370
 371
 372
 373
 374
 375
 376
 377
 378
 379
 380
 381
 382
 383
 384
 385
 386
 387
 388
 389
 390
 391
 392
 393
 394
 395
 396
 397
 398
 399
 400
 401
 402
 403
 404
 405
 406
 407
 408
 409
 410
 411
 412
 413
 414
 415
 416
 417
 418
 419
 420
 421
 422
 423
 424
 425
 426
 427
 428
 429
 430
 431
 432
 433
 434
 435
 436
 437
 438
 439
 440
 441
 442
 443
 444
 445
 446
 447
 448
 449
 450
 451
 452
 453
 454
 455
 456
 457
 458
 459
 460
 461
 462
 463
 464
 465
 466
 467
 468
 469
 470
 471
 472
 473
 474
 475
 476
 477
 478
 479
 480
 481
 482
 483
 484
 485
 486
 487
 488
 489
 490
 491
 492
 493
 494
 495
 496
 497
 498
 499
 500
 501
 502
 503
 504
 505
 506
 507
 508
 509
 510
 511
 512
 513
 514
 515
 516
 517
 518
 519
 520
 521
 522
 523
 524
 525

- Point B(4, -5, -9) lies on the curved surface.

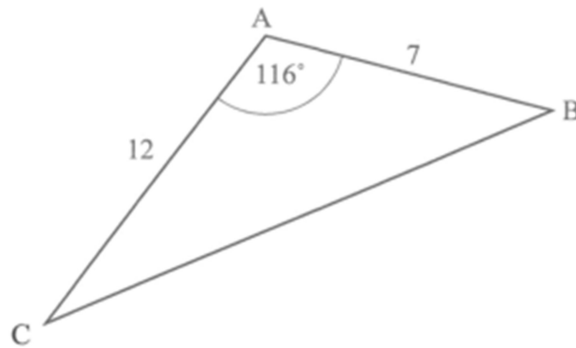


- (a) Find AB , the radius of the hemisphere. [2]
- (b) Hence, find the total surface area of the solid hemisphere. [3]

2. [Maximum mark: 6]

The following diagram shows a triangle ABC , with $AB = 7$, $AC = 12$ and $\hat{BAC} = 116^\circ$.

diagram not to scale



- (a) Find BC . [3]
(b) Find \hat{ACB} . [3]

.....
.....
.....
.....
.....
.....
.....
.....
.....
.....
.....

—

[1]

- [4]

L

4. [Maximum mark: 7]

A supermarket analyses the shopping habits of its customers.

The number of times, X , each customer visits the supermarket in a week is given by the following probability distribution.

x	1	2	3	4	5	≥ 6
$P(X = x)$	$1.5a$	$2a$	0.281	a	0.026	0

- (a) (i) Find the value of a .
 (ii) Write down the mode of X . [3]
- (b) (i) Find the mean of X .
 (ii) Find the variance of X . [3]

The manager wants to know why customers come to their supermarket. They survey the first 50 customers to arrive at the supermarket on a particular day.

- (c) Identify which one of the following best describes the manager's sampling method. Circle your answer. [1]

Simple random / Systematic / Convenience / Quota / Stratified

.....

.....

.....

.....

.....

.....

.....

.....

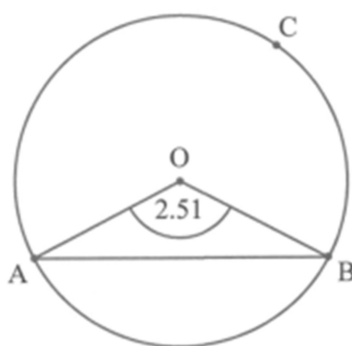
.....

.....



Points A, B and C lie on the circle.

diagram not to scale



Find the length of arc ACB .

6. [Maximum marks: 6]

Consider the function $f(x) = \frac{(2x+a)^3}{(x+5)^2}$, where $x \neq -5$ and $a \in \mathbb{R}^+$.

- (a) Find an expression for $f'(x)$, in terms of a . [3]

When $x = 1$, the tangent to the graph of f makes an angle of 70° to the horizontal.

- (b) Find the smallest value of a . [3]

.....

.....

.....

.....

.....

.....

.....

.....

.....

.....

.....

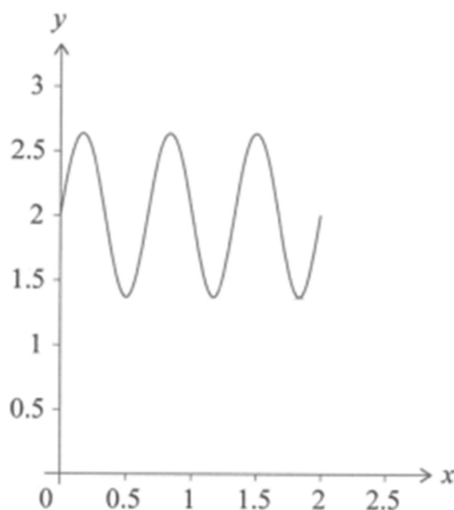
Do **not** write solutions on this page.

Section B

Answer **all** questions in the answer booklet provided. Please start each question on a new page.

7. [Maximum mark: 15]

Consider the function $f(x) = \frac{2}{\pi} \sin(3\pi x) + 2$, where $0 \leq x \leq 2$. The following diagram shows the graph of f .



- (a) (i) Write down the amplitude of f .
(ii) Find the period of f . [3]
- (b) The point P has coordinates $(1.63, 2.16)$. State whether P lies above, below or on the graph of f . Justify your answer. [3]

The line L_1 has equation $x - 6y + 11 = 0$.

- (c) Write down the gradient of the line L_1 . [1]

(This question continues on the following page)

Do **not** write solutions on this page.

(Question 7 continued)

The line L_1 is normal to the graph of f at point $A(1, 2)$.

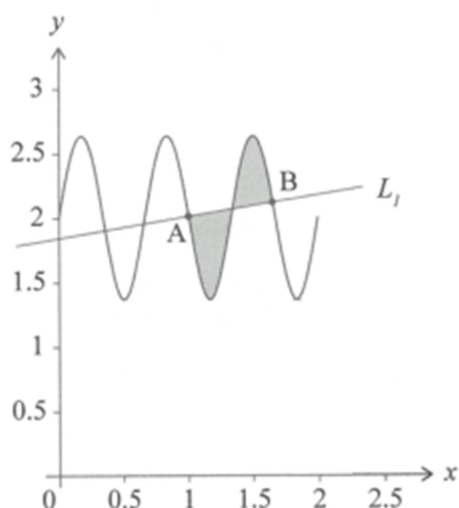
The line L_2 is tangent to the graph of f at A .

(d) (i) Find the gradient of L_2 .

(ii) Hence, or otherwise, find the equation of L_2 .

[3]

The line L_1 intersects the graph of f at another point B , where the x -coordinate of B is greater than 1.5. This is shown in the following diagram.



(e) Find the coordinates of B .

[2]

The shaded region is enclosed by the graph of f and the line L_1 between A and B .

(f) Find the area of the shaded region.

[3]

Do not write solutions on this page.

8. [Maximum mark: 17]

Consider a discrete random variable X .

- (a) State two conditions required for X to be modelled by a binomial distribution. [2]

A water theme park has two rides: *Daifong* and *Torbellino*. Each visitor's decision to ride on either *Daifong* or *Torbellino* is made independently of any other person.

From previous records, it is expected that 37% of the visitors on any particular day will ride *Daifong*.

On Saturday, 1900 people will visit the theme park.

- (b) Find the number of people that are expected to ride *Daifong*. [2]

- (c) Find the probability that

- (i) 712 people will ride *Daifong*,
(ii) between 684 and 712 people, inclusive, will ride *Daifong*. [4]

- (d) Given that between 684 and 712 people, inclusive, will ride *Daifong*, find the probability that at most 692 people will ride *Daifong*. [4]

The ride *Torbellino* is more popular at the theme park. It is expected that 61% of the visitors on any particular day will ride *Torbellino*.

It can be assumed that the probability a person will ride *Daifong* is independent of them riding *Torbellino*.

- (e) Find the probability that a person will ride both *Daifong* and *Torbellino*. [2]

Next Tuesday n people will visit the theme park. The probability that at most 500 people will ride *Torbellino* is approximately 0.693.

- (f) Find the value of n . [3]

Do not write solutions on this page.

9. [Maximum mark: 14]

Two athletes, Fiona and Lucy, compete in a 200 metres race along a straight track.

Fiona's velocity, in m s^{-1} , during the race can be modelled by $v(t) = \frac{8.14t}{\sqrt{t^2 + 0.2}}$, where $t \geq 0$.
Time, t , is measured in seconds from when the race starts.

- (a) (i) Write down the value of $v(1)$.
- (ii) Find the time when Fiona's velocity is 5 m s^{-1} . [3]
- (b) Find the time when Fiona's acceleration is 4 m s^{-2} . [2]
- (c) (i) Write down the limit of $v(t)$ as t approaches infinity.
- (ii) State a reason why the value in part (c)(i) is not valid in the context of this question. [3]

Lucy's velocity, in m s^{-1} , during the race can be modelled by $w(t) = \frac{8t}{\sqrt{t^2 + 0.3}}$, where $t \geq 0$.

Fiona completes the race and crosses the finishing line in front of Lucy.

- (d) Find the distance Lucy is from the finishing line when Fiona completes the 200 metres. [6]
-

Please **do not** write on this page.

Answers written on this page
will not be marked.